


Hoe meet ik mijn dak of goot op?

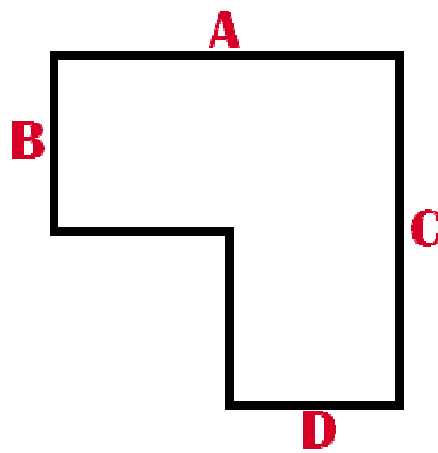


1. 10 cm oversteek
2. Horizontale dakrand
3. Verticale dakrand
4. Netto dakoppervlak
5. Verticale dakrand
6. Horizontale dakrand
7. 10 cm oversteek

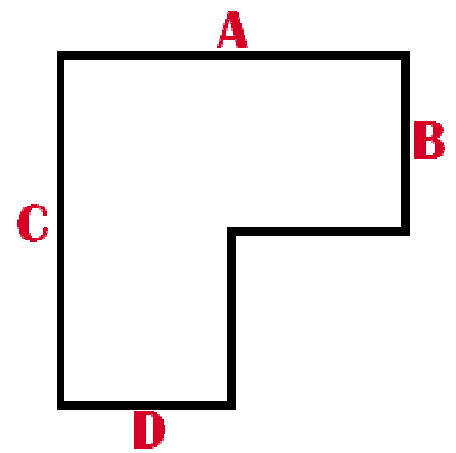
Welke dakvorm heb ik?



Dakvorm A



Dakvorm B



Dakvorm C

Dakvorm: _____

A: _____ cm

B: _____ cm

C: _____ cm n.v.t.

D: _____ cm n.v.t.